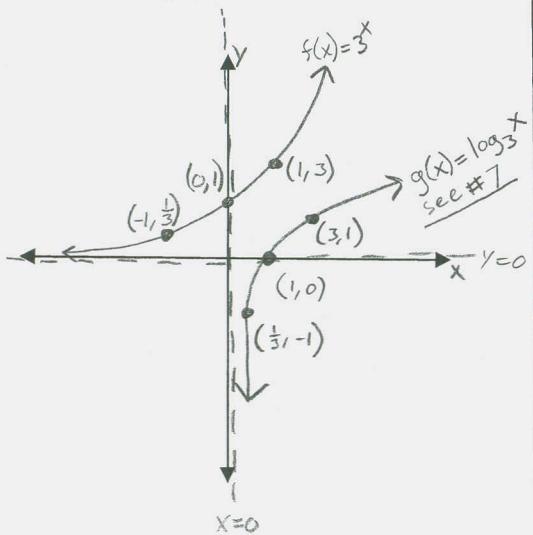


It is really important to know what the basic graphs of exponential and logarithmic functions look like, along with their 3 key points. Also, you need to know how to transform these graphs. **MAKE SURE YOU KNOW** your laws of logarithms and exponents!!!!!! It would be wise to review Monday's notes as well.

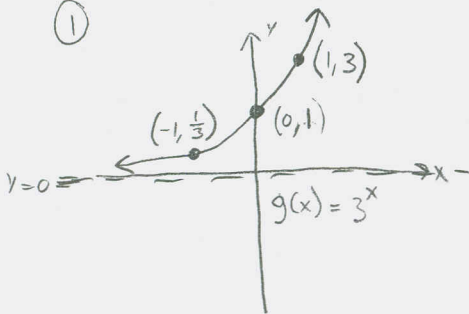
Graph:

1. $f(x) = 3^x$



2. $f(x) = 2 \cdot 3^{-x+1} - 4$
(show the transformations)

①



① $g(x) = 3^x$

② $2 \cdot g(x) = 2 \cdot 3^x$

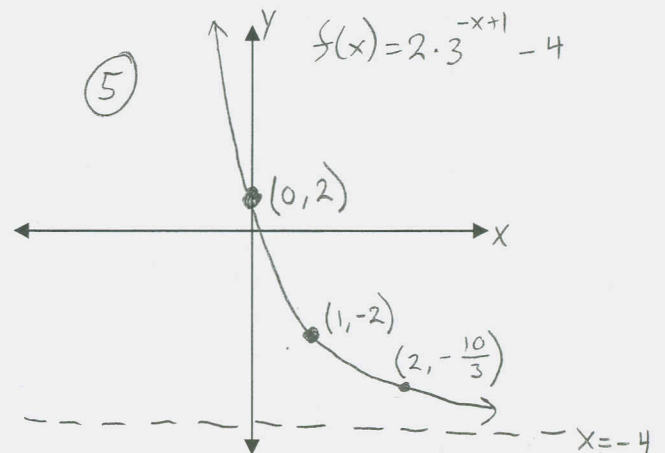
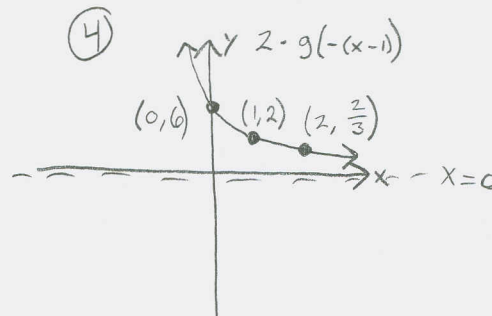
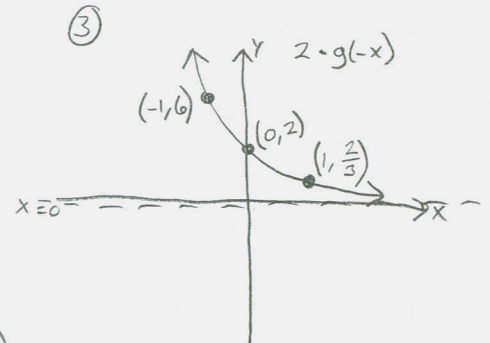
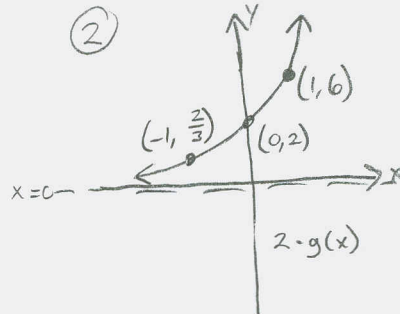
③ $2 \cdot g(-x) = 2 \cdot 3^{-x}$

④ $2 \cdot g(-(x-1)) = 2 \cdot 3^{-(x-1)}$

⑤ $2 \cdot g(1-x) - 4 = 2 \cdot 3^{-(x-1)} - 4 = f(x)$

$-x+1 = -(x-1)$

This space for #2:



3. Evaluate the following expressions without using a calculator.

i. $8^{\left(\frac{2}{3}\right)} = \left(8^{\frac{1}{3}}\right)^2 = \left(\sqrt[3]{8}\right)^2 = \left(\sqrt[3]{2 \cdot 2 \cdot 2}\right)^2 = (2)^2 = \boxed{4}$

ii. $\left(\frac{1}{2}\right)^{-4} = \frac{1^{-4}}{2^{-4}} = (1)(2)^4 = \boxed{16}$

iii. $\log_4 256 = \log_4 (4)^4 = 4 \log_4 (4) = \boxed{4}$

Since base is 4, divide by 4

$$\begin{array}{r} 4 \overline{)256} \\ \underline{4} \\ 64 \\ \underline{4} \\ 16 \\ \underline{4} \\ 4 \\ \underline{4} \\ 0 \end{array}$$

= 4⁴

4. Express $\log_3 \sqrt[7]{\frac{10x^7y^{-4}}{z^{-3}}}$ in terms of logarithms x , y , and z .

$$\log_3 \left[\left(\frac{10x^7y^{-4}}{z^{-3}} \right)^{\frac{1}{7}} \right] = \frac{1}{7} \log_3 \left(\frac{10x^7z^3}{y^4} \right) = \frac{1}{7} \left[\log_3(10) + \log_3(x^7) + \log_3(z^3) - \log_3(y^4) \right]$$

$$= \frac{1}{7} \log_3(10) + \frac{1}{7}(7) \log_3(x) + \frac{1}{7}(3) \log_3(z) - \frac{1}{7}(4) \log_3(y)$$

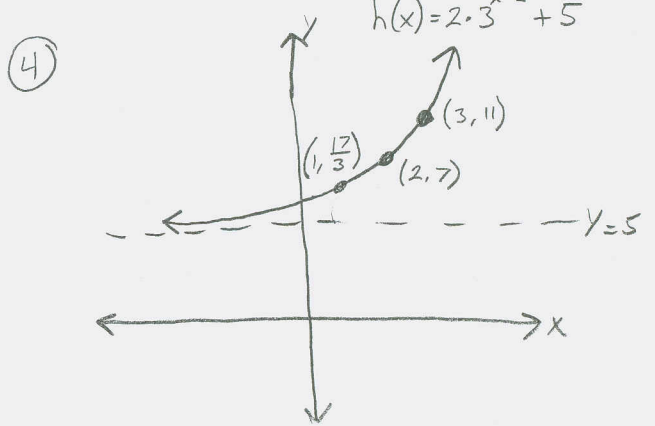
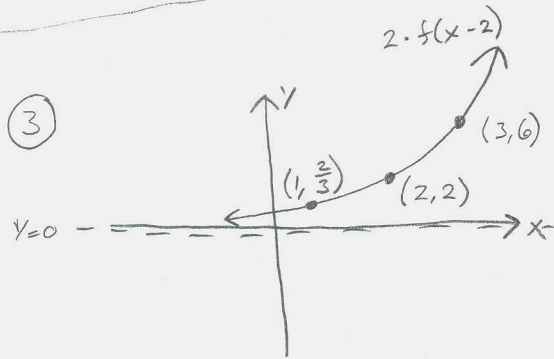
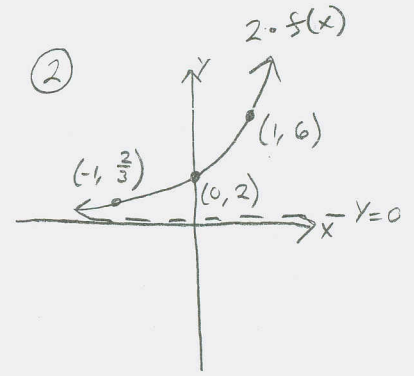
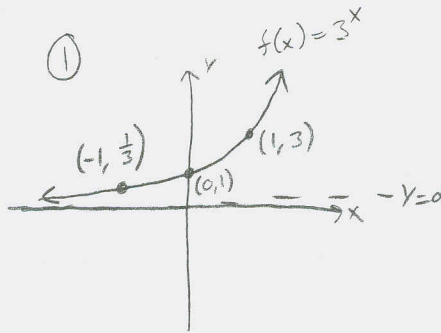
$$= \frac{1}{7} \log_3(10) + \log_3(x) + \frac{3}{7} \log_3(z) - \frac{4}{7} \log_3(y) \leftarrow \text{this a good answer}$$

this is prob far enough

5. Use transformations to graph the following functions

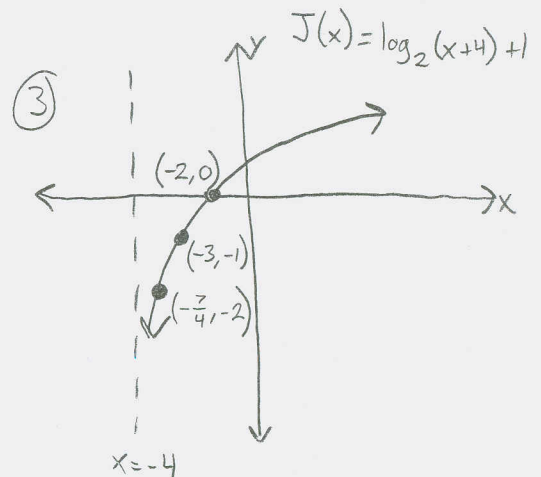
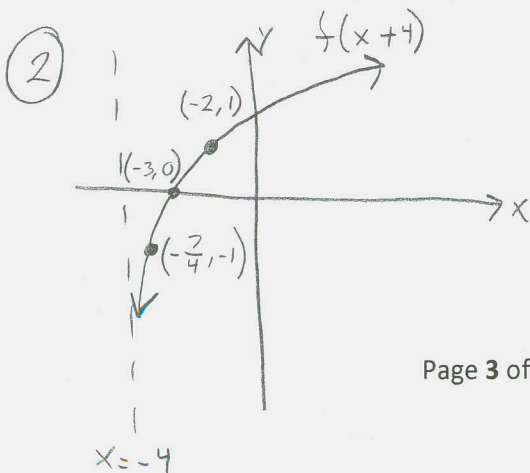
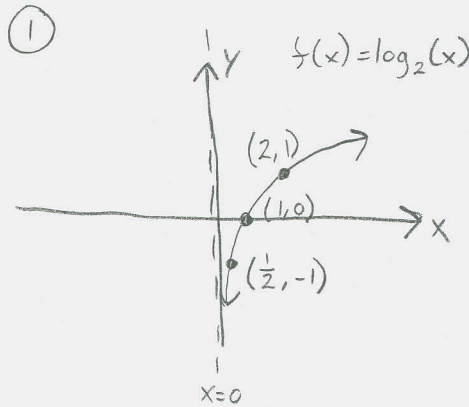
i. $h(x) = 2 \cdot 3^{x-2} + 5$

- ① $f(x) = 3^x$
- ② $2f(x) = 2 \cdot 3^x$
- ③ $2f(x-2) = 2 \cdot 3^{x-2}$
- ④ $2f(x-2) + 5 = 2 \cdot 3^{x-2} + 5 = h(x)$



ii. $J(x) = \log_2(x+4) - 1$

- ① $f(x) = \log_2(x)$
- ② $f(x+4) = \log_2(x+4)$
- ③ $f(x+4) - 1 = \log_2(x+4) - 1$



6. Solve correct to four decimal places: $2^{3x} = 3^{2x-4}$. You will need to have a calculator to find the approximate final answer.

$$\begin{aligned} \ln 2^{3x} &= \ln 3^{2x-4} \\ \Rightarrow 3x \ln 2 &= (2x-4) \ln 3 \\ \Rightarrow 3x \ln 2 &= 2x \ln 3 - 4 \ln 3 \\ \Rightarrow 3x \ln 2 - 2x \ln 3 &= -4 \ln 3 \\ \Rightarrow x(3 \ln 2 - 2 \ln 3) &= -4 \ln 3 \end{aligned}$$

$$\Rightarrow x = -\frac{4 \ln(3)}{3 \ln(2) - 2 \ln(3)}$$

$$x = \frac{-\ln(3^4)}{\ln(2^3) - \ln(3^2)}$$

$$x = \frac{-\ln(81)}{\ln(8) - \ln(9)}$$

$$x \approx 37.3096952$$

$x \approx 37.3097$

7. In the space for the graph #1, sketch the graph of $g(x) = \log_3 x$ on the same set of axes as your graph of $f(x) = 3^x$.

See graph on page 1

8. Solve the following equations. (check to make sure your final answers work in the original equation.)

i. $\ln x = \ln(6-2x)$

$$e^{\ln x} = e^{\ln(6-2x)}$$

$$x = 6-2x$$

$$3x = 6$$

$$x = 2$$

check:

$$\ln(2) = \ln(6-2 \cdot 2)$$

$$\ln(2) = \ln(6-4)$$

$$\ln(2) = \ln(2) \checkmark$$

$x \in \{2\}$

ii. $\log_5(x-4) + \log_5(x+2) = \log_5 7$.

$$\log_5[(x-4)(x+2)] = \log_5 7$$

$$5^{\log_5(x^2-2x-8)} = 5^{\log_5 7}$$

$$x^2 - 2x - 8 = 7$$

$$x^2 - 2x - 15 = 0$$

$$(x-5)(x+3) = 0$$

$$x = 5 \text{ OR } x = -3$$

check: $x = 5$

$$\log_5(5-4) + \log_5(5+2) = \log_5(7)$$

$$\Rightarrow \log_5(1) + \log_5(7) = \log_5(7)$$

$$0 + \log_5(7) = \log_5(7) \checkmark$$

$$x = -3: \log_5(-3-4) + \log_5(-3+2) = \log_5 7$$

Not in $\mathbb{D} \dots$

$x = -3$ does not check

$x \in \{5\}$

$$\begin{array}{r} 3 \overline{) 81} \\ \underline{3 \ 27} \\ 54 \\ \underline{5 \ 45} \\ 36 \\ \underline{3 \ 36} \\ 0 \end{array} = 3^4$$

iii. $4^{2x-1} = \frac{1}{2}$

$$\Rightarrow (2^2)^{2x-1} = (2)^{-1}$$

$$(2)^{4x-2} = (2)^{-1}$$

$$4x-2 = -1$$

$$4x = 1$$

$$x = \frac{1}{4}$$

check:

$$4^{(2(\frac{1}{4})-1)} = \frac{1}{2}$$

$$4^{\frac{1}{2}-1} = \frac{1}{2}$$

$$4^{-\frac{1}{2}} = \frac{1}{2}$$

$$\frac{1}{\sqrt{4}} = \frac{1}{2}$$

$$\frac{1}{2} = \frac{1}{2} \checkmark$$

$$x \in \left\{ \frac{1}{4} \right\}$$

iv. $\log_x 16 = 2$

$$\Rightarrow x^{\log_x 16} = x^2$$

$$\Rightarrow 16 = x^2$$

$$|x| = \sqrt{16}$$

$$x = \pm 4$$

$$-4 \notin \mathcal{D}$$

$$x \in \{4\}$$

v. $3^{25x^2} = 81$

$$\Rightarrow 3^{25x^2} = 3^4$$

$$\Rightarrow \log_3 3^{25x^2} = \log_3 3^4$$

$$\Rightarrow 25x^2 = 4$$

$$x^2 = \frac{4}{25}$$

$$|x| = \sqrt{\frac{4}{25}}$$

$$x = \pm \frac{2}{5}$$

both answers check \checkmark

$$x \in \left\{ -\frac{2}{5}, \frac{2}{5} \right\}$$

9. Write the following as the logarithm of a single expression. Assume that variables represent positive numbers. $3 \log_5(x+2) - 4 \log_5(x-7) + \log_5 9$.

$$\Rightarrow \log_5 [(x+2)^3] - \log_5 [(x-7)^4] + \log_5 9 = \log_5 \left[\frac{(x+2)^3 (9)}{(x-7)^4} \right]$$

10. Find f^{-1} : $f(x) = 3^{x+2}$

$$f(x) = y = 3^{x+2}$$

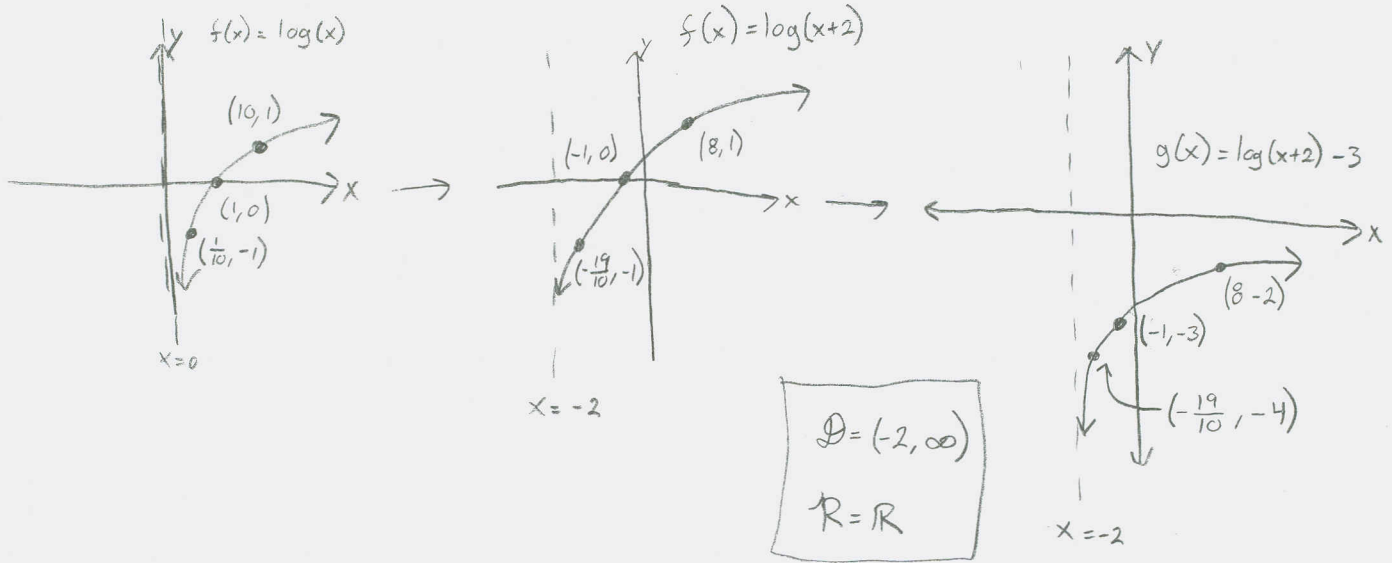
Switch: $x = 3^{y+2}$

$$\log_3 x = \log_3 3^{y+2}$$

$$\log_3 x = y+2$$

$$y = \log_3(x) - 2 = f^{-1}(x)$$

11. Sketch the graph of $g(x) = -3 + \log(x+2)$ and state its domain and range and list its three key points



12. Find the amount that results from each investment.

i. \$100 invested at 11% compounded daily after a period of 3 years.

$$A = P \left(1 + \frac{r}{m}\right)^{mt}$$

$r = \text{interest rate} = 11\% = 0.11$

$t = \text{time in years} = 3$

$m = \text{\# of compounding per year} = 365$

$P = \text{principal} = \text{initial amount} = \100

$A = \text{final amount} = ?$

$$A = 100 \left(1 + \frac{0.11}{365}\right)^{(365)(3)}$$

$$= 100 \left(1 + \frac{0.11}{365}\right)^{1095}$$

$$\approx \$139.0898977$$

$$A \approx \$139.09$$

ii. \$120 invested at 12% for 12 years, compounded continuously.

$r = \text{interest rate} = 12\% = 0.12$

$t = \text{time in years} = 12$

$m = \text{\# of compounding periods per year} = e$

$P = \text{principle} = \$120$

$A = \text{final amount} = ?$

$$A = Pe^{rt}$$

$$A = 120e^{(0.12)(12)}$$

$$A \approx 506.483498$$

$$A \approx \$506.48$$

Continuous compounding

13. If Joe Monty with SI publications wants to make an investment of \$20 at 4% APR compounded continuously, how long will he have to wait until his investment triples?? (i.e. find the tripling time).

$$A = Pe^{rt}$$

$$r = \text{interest rate} = 4\% = 0.04$$

$$t = \text{time in years} = ?$$

$$P = \text{principle} = \$20$$

$$A = 3P = \text{triple the original investment}$$

$$A = Pe^{rt} = 3P$$

$$\frac{Pe^{rt}}{P} = \frac{3P}{P}$$

$$e^{rt} = 3$$

$$rt = \ln 3$$

$$t = \frac{\ln 3}{r} = \frac{\ln 3}{.04}$$

$$t \approx 27.46530722$$

$$t \approx 27.5 \text{ years}$$

→ It would take about 27.5 years for Joe's investment to triple.

14. Find the time (to the nearest month) that ~~it~~^{it} takes to pay off a loan of \$100,000 at 9% APR compounded monthly with payments of \$1250 per month

$$R = P \frac{\frac{r}{m}}{1 - (1 + \frac{r}{m})^{-mt}} = P \frac{i}{1 - (1 + i)^{-mt}}$$

$$R = P \frac{i}{1 - (1 + i)^{-mt}}$$

$$R = \text{payment} = \$1,250/\text{month}$$

$$t = \text{time in years} = ?$$

$$P = \text{principal loan} = \$100,000$$

$$r = \text{interest rate} = 9\% \text{ APR} = 0.09$$

$$m = \# \text{ of compounding periods per year} = 12$$

$$\dot{i} = \frac{r}{m} = \frac{.09}{12} = 0.0075$$

$$[1 - (1 + i)^{-mt}] R = P \frac{i}{1 - (1 + i)^{-mt}} [1 - (1 + i)^{-mt}]$$

$$(1 - (1 + i)^{-mt}) R = Pi$$

$$1 - (1 + i)^{-mt} = \frac{Pi}{R}$$

$$1 - \frac{Pi}{R} = (1 + i)^{-mt}$$

$$\ln\left(1 - \frac{Pi}{R}\right) = \ln\left[(1 + i)^{-mt}\right]$$

$$\rightarrow \ln\left(1 - \frac{Pi}{R}\right) = -mt \ln(1 + i)$$

$$-\frac{\ln\left(1 - \frac{Pi}{R}\right)}{m \ln(1 + i)} = t$$

$$t = -\frac{\ln\left(1 - \frac{(100,000)(0.0075)}{1250}\right)}{(12)(\ln(1 + 0.0075))}$$

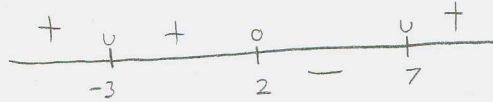
$$t \approx 10.21913937 \text{ years}$$

$$t \approx 10 \text{ years and 3 months}$$

15. What is the domain of $\sqrt{\frac{x-2}{(x+3)^2(x-7)^3}}$? Need $\frac{x-2}{(x+3)^2(x-7)^3} \geq 0$ & $(x+3)^2(x-7)^3 \neq 0$

Zeros; $x = 2$
 $n = 1$
 cross

V.A.: $x = -3$ $x = 7$
 $n = 2$ $n = 3$
 NO sign change Change
 change sign



$$\mathcal{D} = (-\infty, -3) \cup (-3, 2] \cup (7, \infty)$$

double check

test $x = 8$:

$$\frac{8-2}{(8+3)^2(8-7)^3} = \frac{6}{(11)^2(1)^3} = \frac{\text{Pos}}{\text{Pos}}$$

16. What is the domain of $\ln \frac{x-2}{(x+3)^2(x-7)^3}$? Same as above, except $\frac{x-2}{(x+3)^2(x-7)^3} > 0$

$$\mathcal{D} \ln(x) = \{x | x > 0\}$$



$$\mathcal{D} = (-\infty, -3) \cup (-3, 2) \cup (7, \infty)$$

17. Solve: $\log_6(K-1) + \log_6(K-2) = 1$

$$\rightarrow \log_6[(k-1)(k-2)] = 1$$

$$6^{\log_6[(k-1)(k-2)]} = 6^1$$

$$(k-1)(k-2) = 6$$

$$k^2 - 3k + 2 = 6$$

$$k^2 - 3k - 4 = 0$$

$$(k-4)(k+1) = 0$$

$$k = 4 \text{ OR } k = -1$$

Check:

$$k = 4:$$

$$\log_6(4-1) + \log_6(4-2) \stackrel{?}{=} 1$$

$$\log_6(3) + \log_6(2) \stackrel{?}{=} 1$$

$$\log_6[(3)(2)] \stackrel{?}{=} 1$$

$$\log_6(6) = 1$$

$$1 = 1 \checkmark$$

$$k = -1:$$

$$\log_6(-1-1) + \log_6(-1-2) \stackrel{?}{=} 1$$

$$\log_6(-2) + \log_6(-3) \stackrel{?}{=} 1 \quad \underline{\text{No!}}$$

must be positive!

throw out $x = -1$

$$x \in \{4\}$$

18. The half-life of Carbon-14 is $\sim 5,730$ years.

- i. Find an exponential model that gives the amount of radioactive Carbon-14 present in a charcoal sample after t years.

$$A = Pe^{-kt}$$

A = amount of C-14 present after t years = ?

P = Initial amount of C-14

k = decay rate

t = time in years

$$A = Pe^{-kt} = \frac{1}{2}P$$

$$\frac{Pe^{-kt}}{P} = \frac{\frac{1}{2}P}{P}$$

$$\ln e^{-kt} = \ln\left(\frac{1}{2}\right)$$

$$-kt = \ln\left(\frac{1}{2}\right)$$

$$k = -\frac{\ln\left(\frac{1}{2}\right)}{t}$$

$$\rightarrow k = -\frac{\ln\left(\frac{1}{2}\right)}{5,730}$$

$$A = Pe^{-\left(-\frac{\ln\left(\frac{1}{2}\right)}{5,730}\right)t}$$

$$A = Pe^{\left[\frac{\ln\left(\frac{1}{2}\right)}{5,730}\right]t}$$

- ii. According to mainstream science, how old should a sample from a Neolithic fire pit be if it is found that 32% of naturally occurring Carbon-14 is present in the sample? (round answer to nearest year)

$$A = .32P$$

$$A = Pe^{\left(\frac{\ln\left(\frac{1}{2}\right)}{5,730}\right)t} = .32P$$

$$\frac{Pe^{\left(\frac{\ln\left(\frac{1}{2}\right)}{5,730}\right)t}}{P} = \frac{.32P}{P}$$

$$e^{\left(\frac{\ln\left(\frac{1}{2}\right)}{5,730}\right)t} = .32$$

$$\left(\frac{\ln\left(\frac{1}{2}\right)}{5,730}\right)t = \ln(.32)$$

$$t = \frac{\ln(.32)}{\frac{\ln\left(\frac{1}{2}\right)}{5,730}} = \frac{\ln(.32)}{\ln\left(\frac{1}{2}\right)} (5,730)$$

$$t \approx 9,419.295967$$

$$t \approx 9,419.30 \text{ years}$$

19. This one involves some chapter 3 stuff. May not see this on this test, but it is important to keep up on this stuff for the final.

$$\begin{aligned} \text{Solve } \frac{e^x + e^{-x}}{2} &= 1 \\ \Rightarrow e^x + e^{-x} &= 2 \\ e^x(e^x + e^{-x}) &= (2)e^x \\ (e^x)^2 + e^0 &= 2e^x \\ (e^x)^2 - 2e^x + 1 &= 0 \\ \text{let } u = e^x & \\ u^2 - 2u + 1 &= 0 \\ (u-1)(u-1) &= 0 \end{aligned}$$

$$\begin{aligned} (u-1)^2 &= 0 \\ u-1 &= 0 \\ e^x - 1 &= 0 \\ e^x &= 1 \\ \ln e^x &= \ln 1 \\ x &= 0 \end{aligned}$$

check:

$$\begin{aligned} \frac{e^0 + e^{-0}}{2} &\stackrel{?}{=} 1 \\ \frac{1+1}{2} &= 1 \\ \frac{2}{2} &= 1 \\ 1 &= 1 \checkmark \end{aligned}$$

$x \in \{0\}$

20. Solve $\ln(x) - \ln(x+1) = \ln(x+3) - \ln(x+5)$

$$\Rightarrow \ln\left(\frac{x}{x+1}\right) = \ln\left(\frac{x+3}{x+5}\right)$$

$$\Rightarrow e^{\ln\left(\frac{x}{x+1}\right)} = e^{\ln\left(\frac{x+3}{x+5}\right)}$$

$$\frac{x}{x+1} = \frac{x+3}{x+5}$$

$$x(x+5) = (x+1)(x+3)$$

$$\cancel{x^2} + 5x = \cancel{x^2} + 4x + 3$$

$$5x - 4x = 3$$

$$x = 3$$

check:

$$\ln(3) - \ln(3+1) = \ln(3+3) - \ln(3+5)$$

$$\ln\left(\frac{3}{4}\right) = \ln\left(\frac{6}{8}\right)$$

$$\ln\left(\frac{3}{4}\right) = \ln\left(\frac{3}{4}\right) \checkmark$$

$x \in \{3\}$