

1. (5 pts) Form a polynomial in factored form with *real* coefficients with the given zeros and degree. Please do not expand the polynomial.

Zeros: -3, multiplicity 2; 5, multiplicity 2. Degree 4.

$$(x+3)^2(x-5)^2$$

2. (5 pts) Expand $(x-4-2i)(x-4+2i)$

$$\begin{aligned} x^2 - 4x + 2ix - 4x + 16 - 8i - 2ix + 8i - 4i^2 \\ = x^2 - 8x + 16 + 4 = x^2 - 8x + 20 \end{aligned}$$

3. (10 pts) Use synthetic division to find $P(2)$ if $P(x) = 3x^4 - 2x^2 + 5x + 1$.

$$\begin{array}{r|rrrrr} 2 & 3 & 0 & -2 & 5 & 1 \\ & & 6 & 12 & 20 & 50 \\ \hline & 3 & 6 & 10 & 25 & 51 \end{array} \quad (x-2)(3x^3 + 6x^2 + 10x + 25) + 51$$

$51 = P(2)$

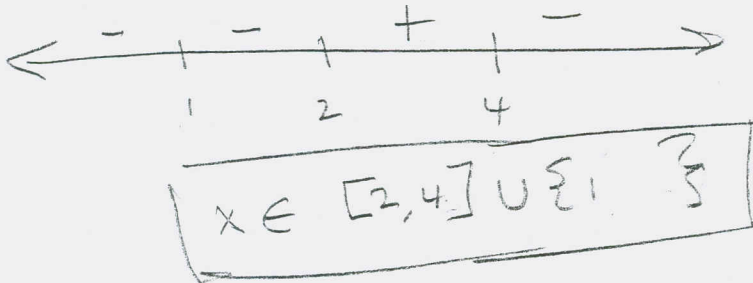
4. (10 pts) Divide $f(x) = 2x^4 - x^3 + 3x^2 - 4$ by $d(x) = x^2 + 1$. Then write the result in the form *Dividend = Divisor · Quotient + Remainder*.

$$\begin{array}{r} 2x^2 - x + 1 \\ x^2+1 \overline{) 2x^4 - x^3 + 3x^2 + 0x - 4} \\ \underline{-(2x^4)} \\ -x^3 + x^2 + 0x - 4 \\ \underline{-(-x^3 - x)} \\ x^2 + x - 4 \\ \underline{-(x^2 + 1)} \\ x - 5 \end{array}$$

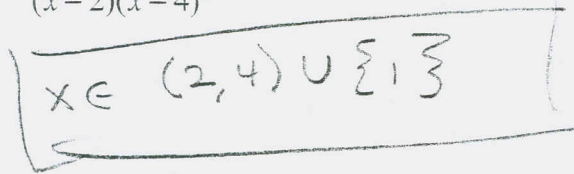
$$f(x) = (x^2+1)(2x^2-x+1) + x-5$$

5. Solve the inequalities:

a. (5 pts) $-4(x-1)^2(x-2)(x-4)^3 \geq 0$



b. (5 pts) $\frac{-4(x-1)^2}{(x-2)(x-4)^3} \geq 0$



6. (10 pts) Find all intercepts, asymptotes and holes, and then sketch the graph of

$$f(x) = \frac{x^3 - 3x^2 - 4x + 12}{x^3 + 2x^2 - 5x - 6} = \frac{(x-2)(x+2)(x-3)}{(x-2)(x+3)(x+1)}$$

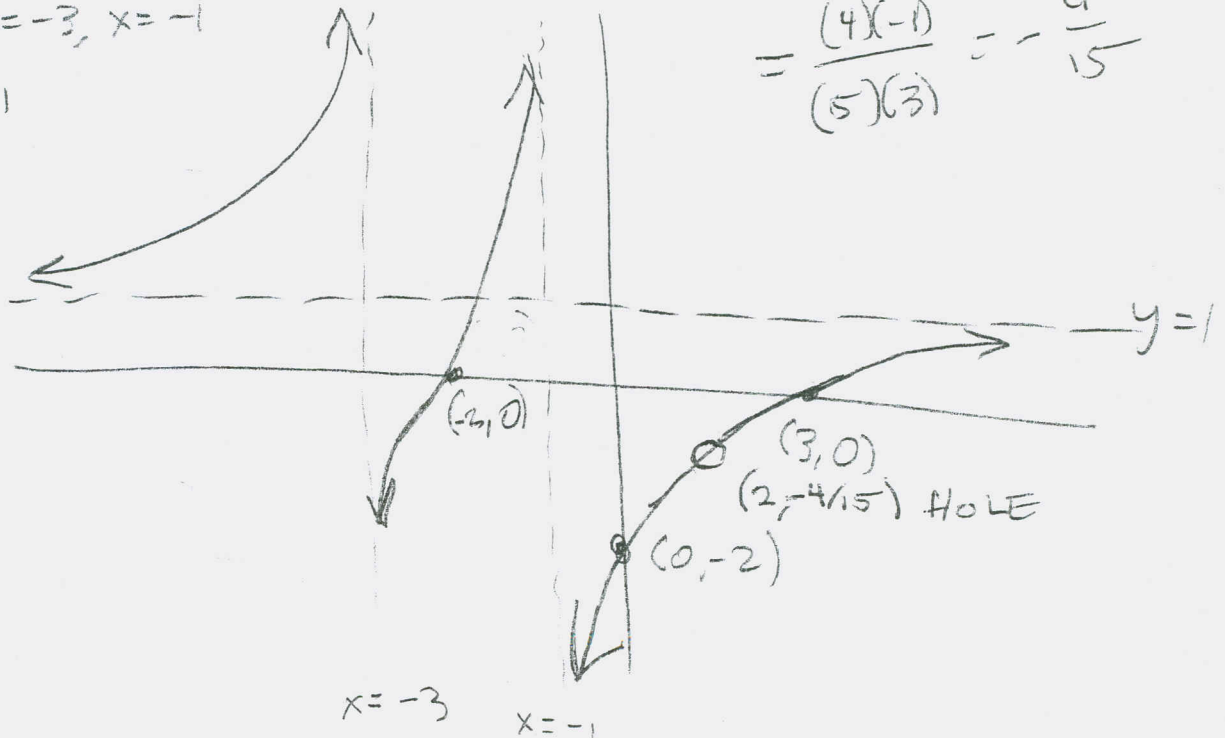
Hole: $x = 2$

Zeros: $x = -2, 3$

V.A.: $x = -3, x = -1$

EB: $y = 1$

Hole: $\frac{(2+2)(2-3)}{(2+3)(2+1)} = \frac{(4)(-1)}{(5)(3)} = -\frac{4}{15}$



7. Solve the equations for x :

a. (10 pts) $25^{2x-3} = 5^{x+1}$

$$(5^2)^{2x-3} = 5^{x+1}$$

$$2(2x-3) = x+1$$

$$4x - 6 = x + 1$$

$$3x = 7$$

$$x = \frac{7}{3}$$

b. (10 pts) $3 \cdot 2^{x+1} - 4 = 0$

$$3 \cdot 2^{x+1} = 4$$

$$2^{x+1} = \frac{4}{3}$$

$$x+1 = \log_2\left(\frac{4}{3}\right)$$

$$x = -1 + \log_2\left(\frac{4}{3}\right)$$

$$= -1 + \frac{\ln(4/3)}{\ln(2)} \approx -0.5849625007$$

c. (10 pts) $-2\log_3(-2x+6) = 0$

$$\log_3(-2x+6) = 0$$

$$-2x+6 = 3^0 = 1$$

$$-2x = -5$$

$$x = \frac{5}{2}$$

d. (10 pts) $P\left(1 + \frac{.06}{12}\right)^{12x} = 3P$

$$\left(1 + \frac{.06}{12}\right)^{12x} = 3$$

$$12x \log\left(1 + \frac{.06}{12}\right) = \log(3)$$

$$x = \frac{\log(3)}{12 \log\left(1 + \frac{.06}{12}\right)}$$

$$\approx 18.35594227$$

e. (10 pts) $\ln(x-2) + \ln(x+1) = \ln(4)$

$$\ln((x-2)(x+1)) = \ln(4)$$

$$(x-2)(x+1) = 4$$

$$x^2 - x - 2 = 4$$

$$x^2 - x - 6 = 0$$

Note to self:
Guess and check
or cheat was
common, here.

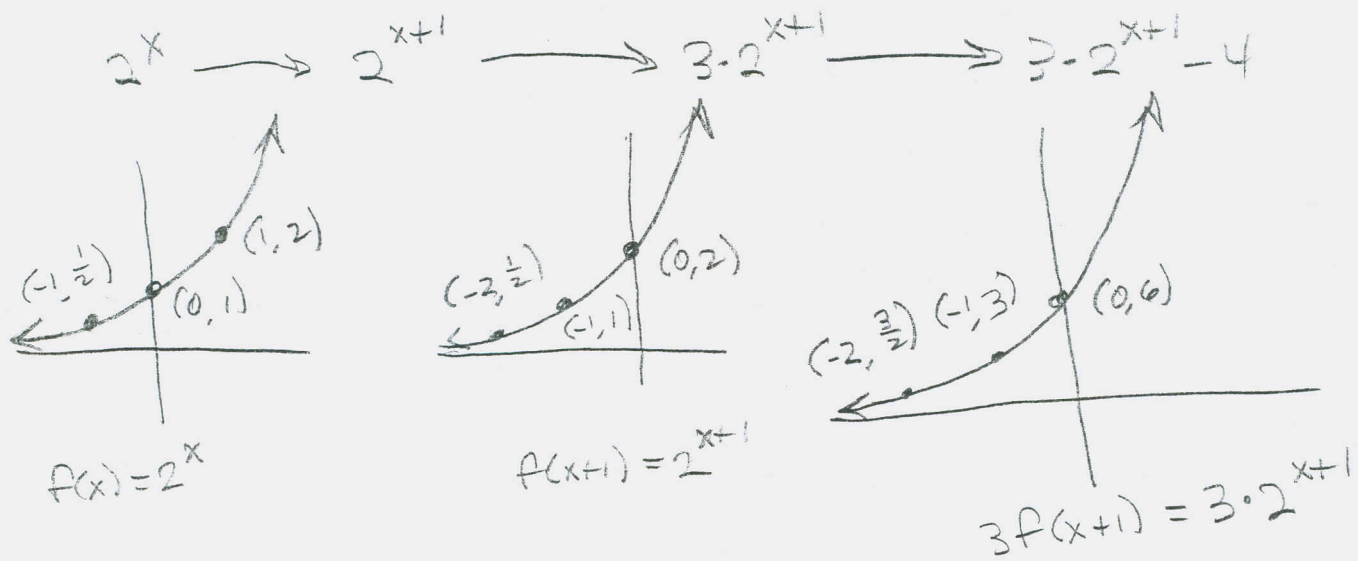
$$(x-3)(x+2) = 0$$

$$x = -2, 3, \text{ but}$$

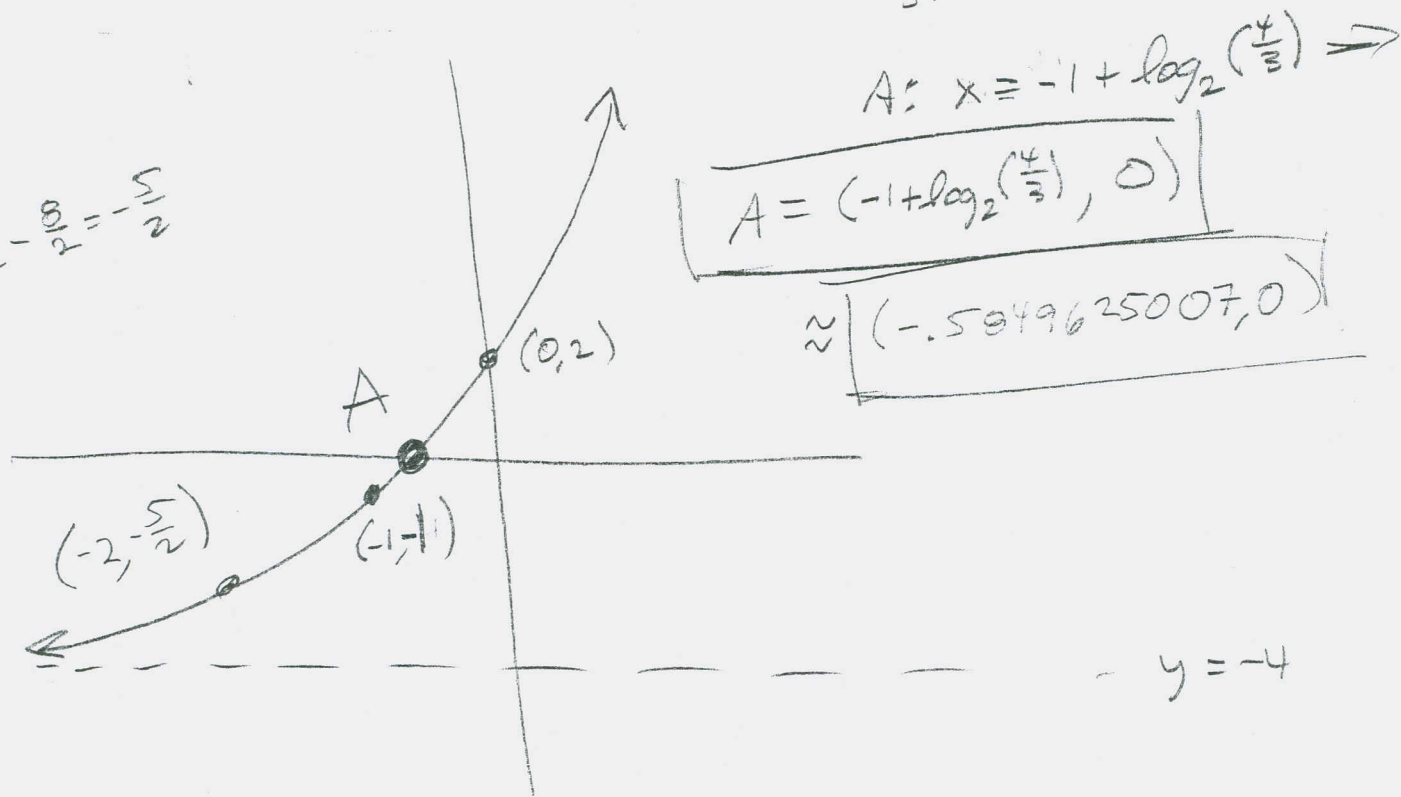
$x = -2 \notin \text{Domain}$, so

$$x = 3$$

8. (20 pts) Sketch the graph of $g(x) = 3 \cdot 2^{x+1} - 4$ by transforming the function $f(x) = 2^x$. Use $x = -1$, $x = 0$, and $x = 1$ to find 3 points in the first graph, and show how these 3 points are moved around by each step in the transformation to $g(x)$. Your final graph should also show the y -intercept and the x -intercept.



$$\frac{3}{2} - \frac{1}{2} = -\frac{5}{2}$$



$$\begin{aligned}
 &3f(x+1) - 4 \\
 &= 3 \cdot 2^{x+1} - 4
 \end{aligned}$$

9. (20 pts) Sketch the graph of $h(x) = -2\log_3(-2x+6)$ by transforming the function

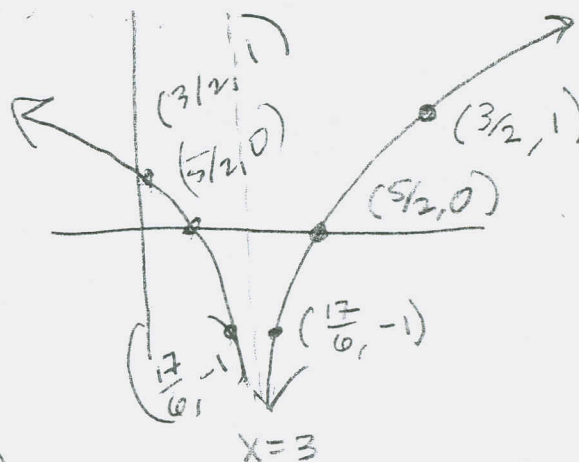
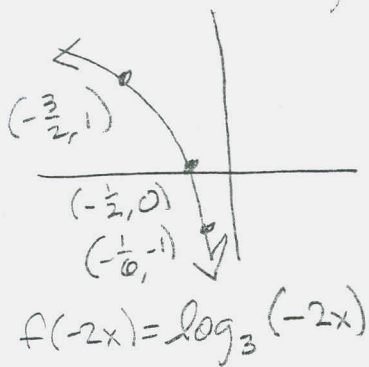
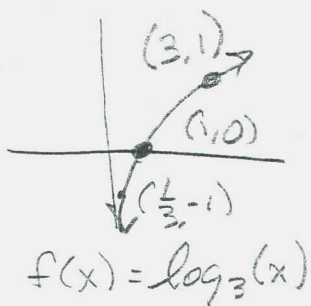
$f(x) = \log_3(x)$. Show the points on the first graph that correspond to $x = \frac{1}{3}, 1, 3$, and show how

they are moved around by each step in the transformations to $h(x)$. Be sure to show the x -intercept on the final graph.

$$-2x+6 = -2(x-3)$$

$$\log_3(x) \rightarrow \log_3(-2x) \rightarrow \log_3(-2(x-3)) \rightarrow$$

$$-2 \log(-2(x-3))$$



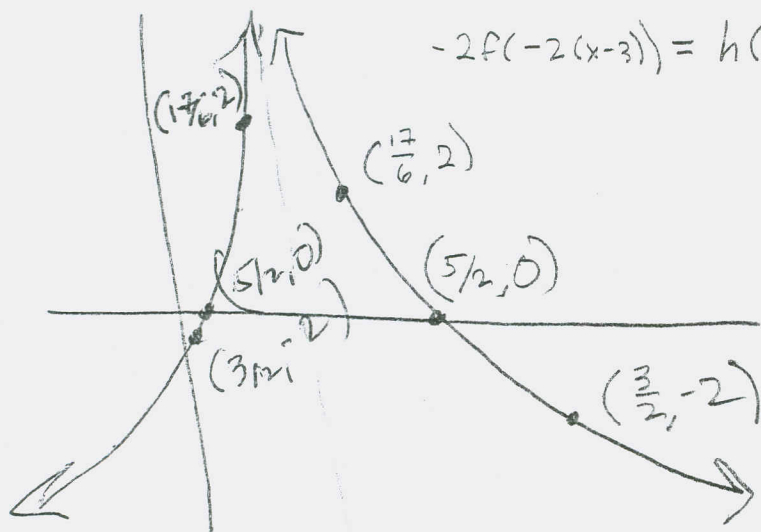
$$-2f(-2(x-3)) = h(x)$$

$$f(-2(x-3)) = \log_3(-2(x-3))$$

$$-\frac{1}{6} + \frac{18}{6} = \frac{17}{6}$$

$$-\frac{1}{2} + \frac{6}{2} = \frac{5}{2}$$

$$-\frac{3}{2} + \frac{6}{2} = \frac{3}{2}$$



10. (10 pts) Suppose the half-life of a radioactive substance is 500 years. How old is a fire pit, if there is only 12% of the naturally occurring radioactive substance present in a charcoal sample taken from the pit?

$$P_0 e^{500k} = \frac{1}{2} P_0$$

$$e^{500k} = \frac{1}{2}$$

$$500k = \ln\left(\frac{1}{2}\right) = -\ln(2)$$

$$k = \frac{-\ln(2)}{500}$$

$$\text{AGE: } P_0 e^{kt} = .12 P_0$$

$$e^{kt} = .12$$

$$kt = \ln(.12)$$

$$t = \frac{\ln(.12)}{k} = \frac{-500 \ln(.12)}{\ln(2)}$$

$$\approx \boxed{1,529.446845 \text{ yrs}}$$